

RAFTER Calculation Worksheet

Instructor: Georger

Name: _____

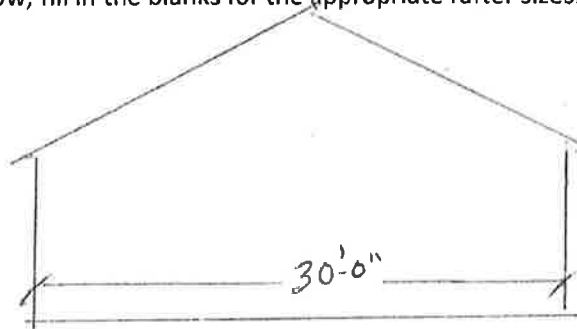
Program/Class: Jr. Carpentry

Date: _____

Instructional Objective (s):

With 95% accuracy, students will calculate rafters based on the given dimensions below.

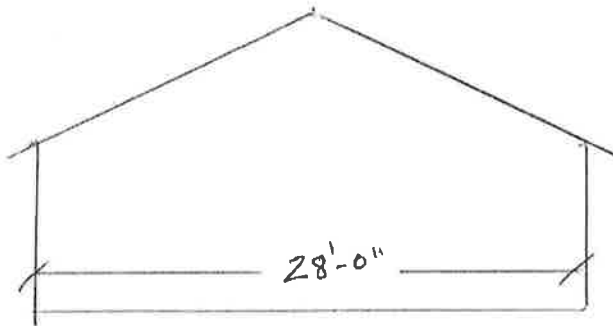
Instructions: For the drawings below, fill in the blanks for the appropriate rafter sizes. Assume 2x6 sub fascia



5/12, 12" OH

RLL= _____

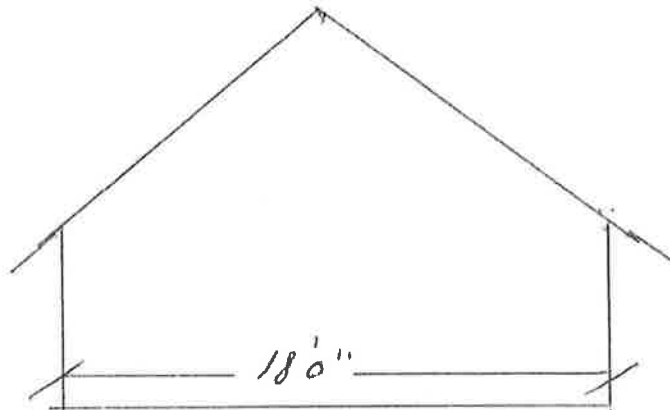
Total Rafter Length= _____



7/12, 12" OH

RLL= _____

Total Rafter Length= _____



10/12, 24" OH

RLL= _____

Total Rafter Length= _____