

Your name \_\_\_\_\_

Assignment # 5 Points 15

Tech Math Off-site Instruction Packet Cover Page (Periods 1,2,4)

Students, You can contact me with questions or just to say hi.

Email: [LEWISJU@mwood.cc](mailto:LEWISJU@mwood.cc) (Put your name in the subject line so I know who you are!!). I will be checking mail multiple times each day.

Topic of this assignment: See 17.1 Solving systems of equations by graphing.

What you need to know: A system is 2 equations with two variables. The solution is the point of intersection where the two lines cross.  $(x, y)$

What you need to do: See # 4. Search online if you need to. Complete remaining problems 1-8

Suggested Youtube/Google search: Solving systems of equations by graphing

\*Identify each solution!

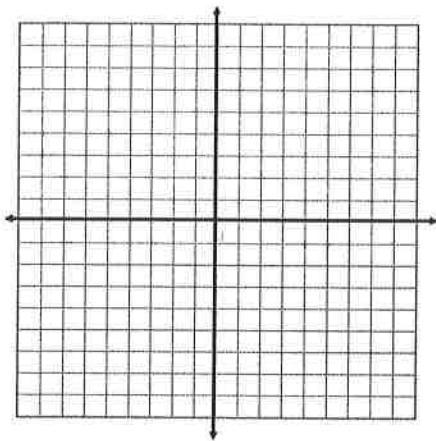
Technical Math  
Section 17.1

Name \_\_\_\_\_

Graph and solve each system of equations.

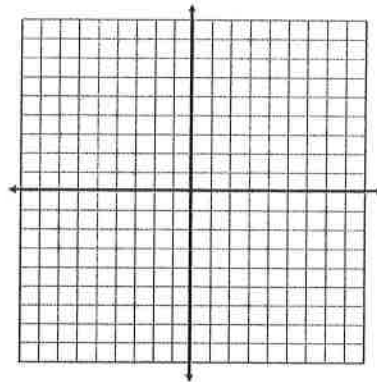
1. 
$$\begin{cases} x = 2y \\ x - y = 2 \end{cases}$$

Solution = \_\_\_\_\_



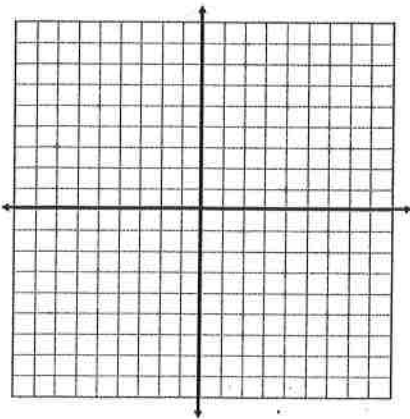
2. 
$$\begin{cases} x - y = 1 \\ x + y = 11 \end{cases}$$

Solution = \_\_\_\_\_



3. 
$$\begin{cases} 2y = x + 10 \\ 2y = -2x + 16 \end{cases}$$

Solution = \_\_\_\_\_



4. 
$$\begin{cases} x + 4y = 0 \\ -2x + y = 9 \end{cases}$$

Solution = (4, -1)

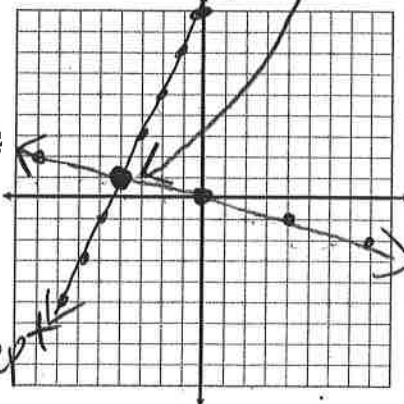
$$\begin{array}{r} x + 4y = 0 \\ -x \quad -x \\ \hline 4y = -x + 0 \\ 4 \quad 4 \quad 4 \end{array}$$

$$y = -\frac{1}{4}x + 0$$

$$y = -\frac{1}{4}x + 0$$

slope ↑

y-intercept ↑



$$\begin{array}{r} -2x + y = 9 \\ +2x \quad +2x \\ \hline y = 2x + 9 \end{array}$$

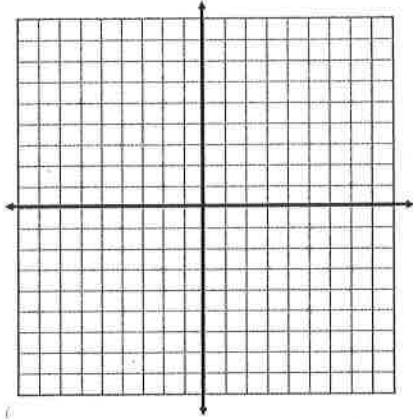
$$y = 2x + 9$$

slope ↑

y-intercept ↑

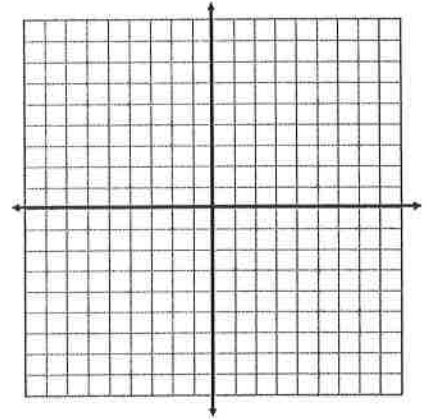
5. 
$$\begin{cases} x - y = 7 \\ 2x - y = 10 \end{cases}$$

Solution = \_\_\_\_\_



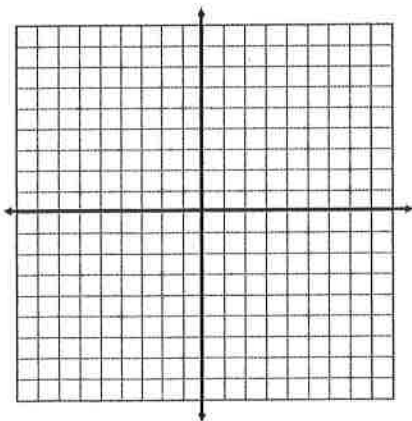
6. 
$$\begin{cases} x - y = 8 \\ 4x + 6y = 12 \end{cases}$$

Solution = \_\_\_\_\_



7. 
$$\begin{cases} -x - 2y = 0 \\ x - y = -6 \end{cases}$$

Solution = \_\_\_\_\_



8. 
$$\begin{cases} 3x + y = 0 \\ 2x + y = 2 \end{cases}$$

Solution = \_\_\_\_\_

